



Determine which letter best represents the volume.

Answers

Cup

A cup is about the amount of milk you get from the cafeteria.



Pint

A pint is about the amount you get in a large glass.

1 pint = 2 cups



Quart

A quart is about the amount you get in a large milk container.

1 quart = 2 pints




Gallon

A gallon is the amount that comes in the large plastic container.

1 gallon = 4 quarts



1)



Gas tank in a car

- A. 16 cups
- B. 4 pints
- C. 3 quarts
- D. 15 gallons

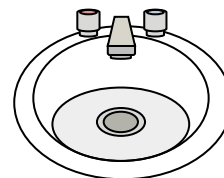
2)



Toothpaste in a tube

- A. 0.5 gallons
- B. 5 grams
- C. 5 quarts
- D. 0.5 cups

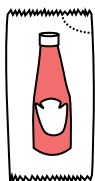
3)



Water in bathroom sink

- A. 2 pints
- B. 2 fluid ounces
- C. 2 gallons
- D. 2 cups

4)



Ketchup in a packet

- A. 2 quarts
- B. 0.5 gallons
- C. less than 1 cup
- D. 1.5 pints


5)



Glue in a bottle

- A. 1 pint
- B. 3 gallons
- C. 0.5 cups
- D. 2 quarts

6)



Sand a wheel barrow holds

- A. 45 gallons
- B. 1000 grams
- C. 8 quarts
- D. 4 cups

7)



Sand in a pail

- A. 7 fluid ounces
- B. 1 gallon
- C. 32 gallons
- D. 1 cup

8)



Liquid a spoon holds

- A. Less than a cup
- B. 1 cup
- C. 1 pint
- D. 1 quart

9)



Soda in a can

- A. 1 gallon
- B. 1.5 cups
- C. 4 cups
- D. 4 pints

1. _____
2. _____
3. _____
4. _____
5. _____
6. _____
7. _____
8. _____
9. _____



Determine which letter best represents the volume.

Cup

A cup is about the amount of milk you get from the cafeteria.



Pint

A pint is about the amount you get in a large glass.

1 pint = 2 cups



Quart

A quart is about the amount you get in a large milk container.

1 quart = 2 pints



Gallon


A gallon is the amount that comes in the large plastic container.

1 gallon = 4 quarts



Answers

1)



Gas tank in a car

- A. 16 cups
- B. 4 pints
- C. 3 quarts
- D. 15 gallons

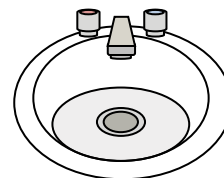
2)



Toothpaste in a tube

- A. 0.5 gallons
- B. 5 grams
- C. 5 quarts
- D. 0.5 cups

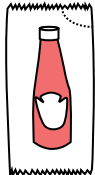
3)



Water in bathroom sink

- A. 2 pints
- B. 2 fluid ounces
- C. 2 gallons
- D. 2 cups

4)



Ketchup in a packet

- A. 2 quarts
- B. 0.5 gallons
- C. less than 1 cup
- D. 1.5 pints


5)



Glue in a bottle

- A. 1 pint
- B. 3 gallons
- C. 0.5 cups
- D. 2 quarts

6)



Sand a wheel barrow holds

- A. 45 gallons
- B. 1000 grams
- C. 8 quarts
- D. 4 cups

7)



Sand in a pail

- A. 7 fluid ounces
- B. 1 gallon
- C. 32 gallons
- D. 1 cup

8)



Liquid a spoon holds

- A. Less than a cup
- B. 1 cup
- C. 1 pint
- D. 1 quart

9)



Soda in a can

- A. 1 gallon
- B. 1.5 cups
- C. 4 cups
- D. 4 pints

- 1. **D**
- 2. **D**
- 3. **C**
- 4. **C**
- 5. **C**
- 6. **A**
- 7. **B**
- 8. **A**
- 9. **B**